

What are the phases of the Moon?

Lesson Review

Match each term in **Column B** with its description in **Column A**. Write the correct letter in the space provided.

Column A

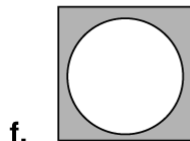

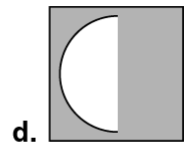
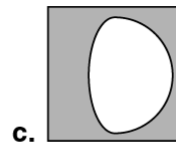
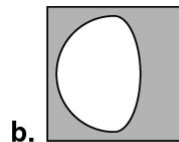

- _____ 1. changing shapes of the moon
- _____ 2. phase when less than half of the moon is visible from Earth
- _____ 3. phase when more than half of the moon is visible from Earth
- _____ 4. phase when the part of the moon that is visible increases
- _____ 5. phase when the part of the moon that is visible decreases
- _____ 6. phase when the whole face of the moon is visible

Column B

- a. waning moon
- b. phases
- c. gibbous phase
- d. crescent phase
- e. waxing moon
- f. full moon

Skill Challenge

In the spaces provided, identify the phase of the moon shown in each drawing. Then, place the phases in the correct order by writing the letter of each drawing in the space provided. Begin with the new moon phase.



a. _____

b. _____

c. _____

d. _____

e. _____

f. _____

g. _____

h. _____

The correct order of the phases of the moon: _____